

Name:

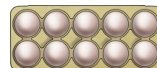
Datum:

Übungsblatt 2

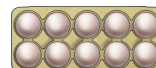
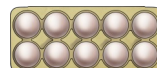
Das ist die Einmaleins-Reihe mit 10.

Lerne sie auswendig!

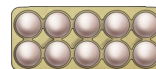
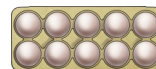
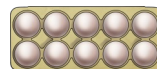
$$1 \cdot 10 = 10$$







$$2 \cdot 10 = 20$$



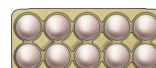
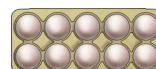
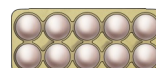

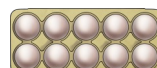
$$3 \cdot 10 = 30$$



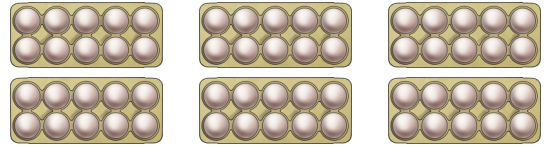
$$4 \cdot 10 = 40$$




$$5 \cdot 10 = 50$$




$$6 \cdot 10 = 60$$




$$7 \cdot 10 = 70$$



$$8 \cdot 10 = 80$$



$$9 \cdot 10 = 90$$



$$10 \cdot 10 = 100$$

